



INDIAN SCHOOL AL WADI AL KABIR
DEPARTMENT OF MATHEMATICS (2022-2023)

TOPIC: NUMBER CONCEPTS (0 – 20)

WORKSHEET - 2





RESOURCE PERSON: SUNITA S BHADRA

NAME: _____

CLASS - I SEC: _____

DATE: _____

Q1. Count the pictures and write the numeral.

a.		
b.		
c.		
d.		

Q2. Draw the values for the given numerals.

a.	11	
b.	14	
c.	3	

CHECKED BY: ACADEMIC COORDINATOR – MATHEMATICS